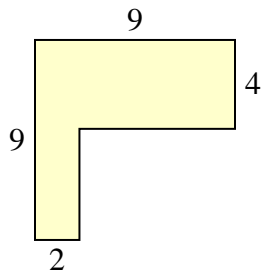


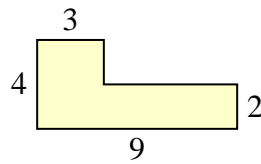


Find the total area of each shape. Measurement is in millimeters (mm). Not to scale.

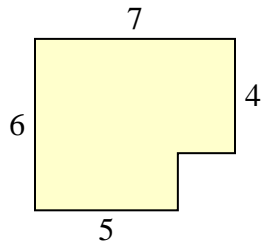
1)



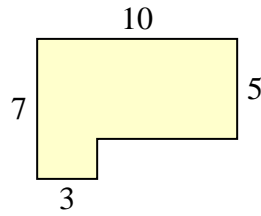
2)



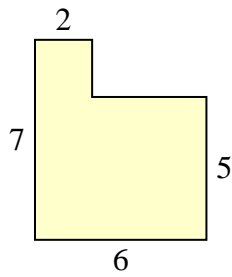
3)



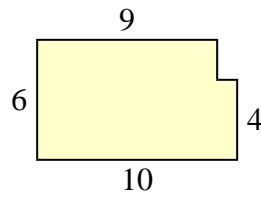
4)



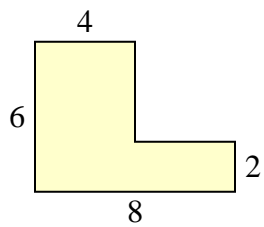
5)



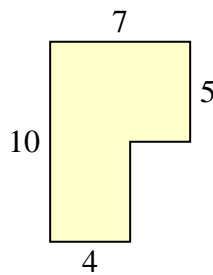
6)



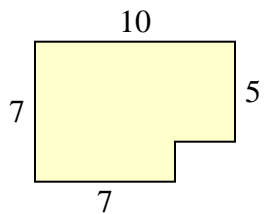
7)



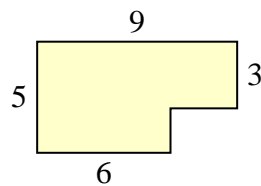
8)



9)



10)

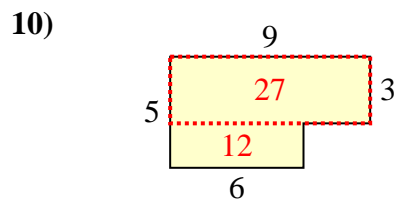
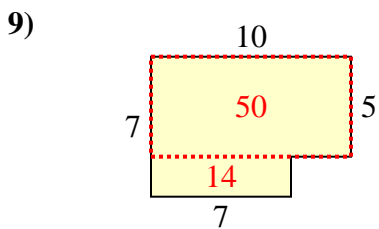
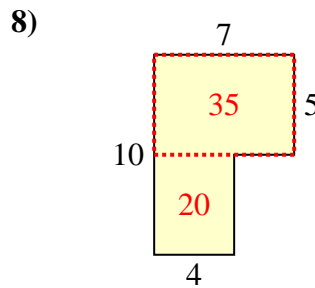
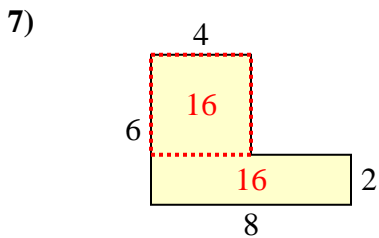
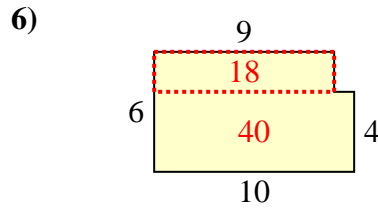
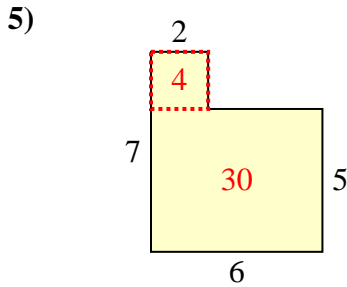
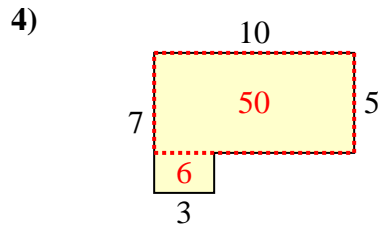
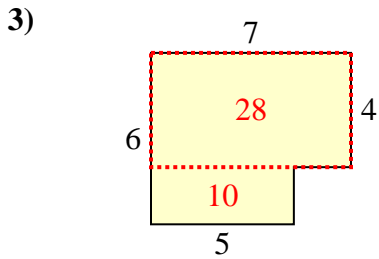
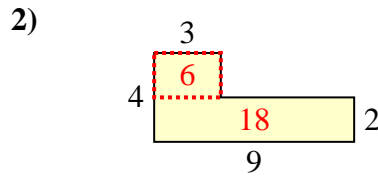
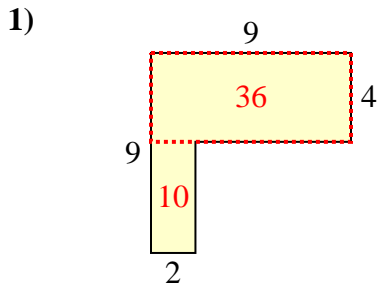


**Answers**

- 1. \_\_\_\_\_
- 2. \_\_\_\_\_
- 3. \_\_\_\_\_
- 4. \_\_\_\_\_
- 5. \_\_\_\_\_
- 6. \_\_\_\_\_
- 7. \_\_\_\_\_
- 8. \_\_\_\_\_
- 9. \_\_\_\_\_
- 10. \_\_\_\_\_



Find the total area of each shape. Measurement is in millimeters (mm). Not to scale.



Answers

1. 46 mm<sup>2</sup>
2. 24 mm<sup>2</sup>
3. 38 mm<sup>2</sup>
4. 56 mm<sup>2</sup>
5. 34 mm<sup>2</sup>
6. 58 mm<sup>2</sup>
7. 32 mm<sup>2</sup>
8. 55 mm<sup>2</sup>
9. 64 mm<sup>2</sup>
10. 39 mm<sup>2</sup>